

Thakur Educational Trust's (Regd.)  
**THAKUR VIDYA MANDIR HIGH SCHOOL & JUNIOR COLLEGE**

II Terminal Examination 2016-17

Subject : Mathematics

NAME \_\_\_\_\_ Std: I DIV. \_\_\_\_\_ Roll NO.: \_\_\_\_\_ MARKS: 60

DATE - 02 / 02 / 2017

Time : 2. 30 hrs

**Q IA] Write in words:**

4

a) 13 = \_\_\_\_\_ b) 96 = \_\_\_\_\_

c) 45 = \_\_\_\_\_ d) 72 = \_\_\_\_\_

**B] Write in numerals:**

4

1) Fifty - \_\_\_\_\_ 2) Thirty six - \_\_\_\_\_

3) Eighty one - \_\_\_\_\_ 4) Sixty nine - \_\_\_\_\_


**C] Write the missing numbers:**

2

37   40


**Q II 1) Match the similar shapes:**

4



**2) How many times does each object appear in the following picture? Count and write:**

4

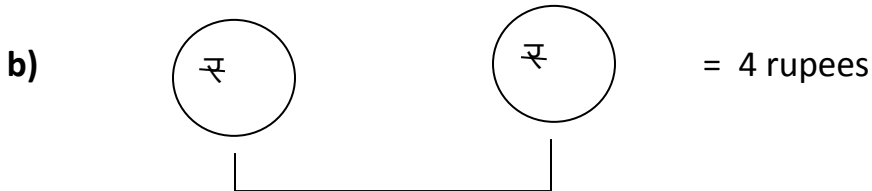




(Page no. 1)

3) Which coins will you use to make the given amount?

2



Q III 1) Write the number before and after the given number:

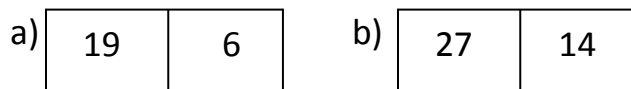
4

a) \_\_\_\_\_ 40 \_\_\_\_\_

b) \_\_\_\_\_ 12 \_\_\_\_\_

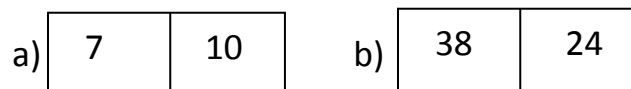
2) Circle the (○) the bigger number:

2



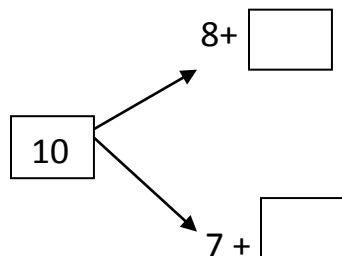
3) Circle the (○) the smaller number:

2



4) Write the correct number in each box so that the sum of the numbers is 10:

2



QIV 1) Match the following:

4

26	One ten five ones
43	Three tens eight ones
15	Two tens six ones
28	Four tens three ones

2) Write the correct number in the box:

2


a)  $4 + 0 =$

b)  $5 + 2 = 2 +$

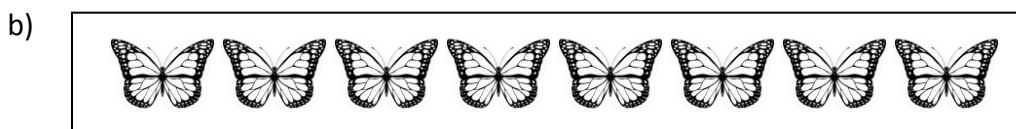
(Page no 2)

3) Subtract by striking off the objects:

4



$7 - 3 =$



$8 - 4 =$

QV 1) Fill in the boxes:

3

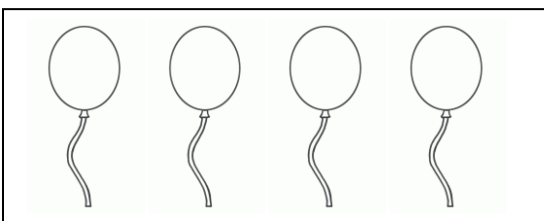
a)  $3 \times 4 =$

b)  $4 \times 5 =$

c)  $2 \times 9 =$

2) Colour any three balloons:

1



3) Read the word problems and write the correct numbers in each box:

6

a) Ajay has two books

Firoz has four books

$+$

How many books in all?

---

b) Riya had five chocolates

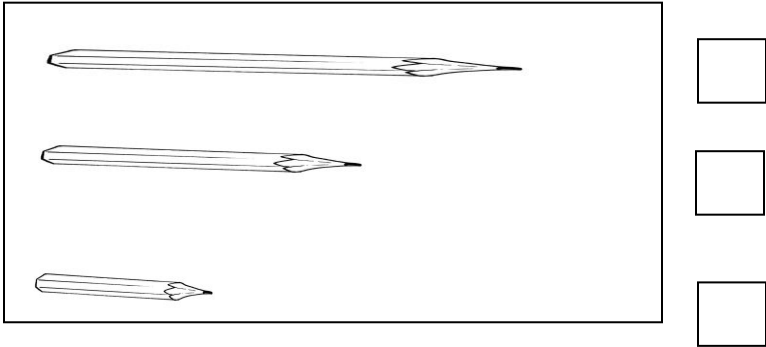
She ate one

$$- \begin{array}{|c|} \hline \square \\ \hline \end{array}$$

How many chocolates are left?

QVI 1) Tick (✓) the longest object and cross (X) the shortest object:



2



(Page no. 3)


2) Tick (✓) the heaviest and cross (X) the lightest:

2



3) Find the sum by counting forward on a number strip:



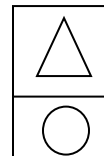

2



$$3 + 2 = \square$$

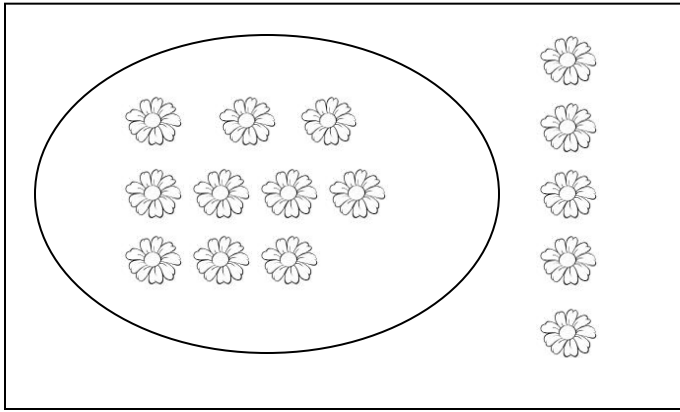
4) Ring the object that comes next:

2



5) Look at the picture and write tens and ones:

2



Ten  Ones

**ALL THE BEST**

hakur Educational Trust's (Regd.)  
**THAKUR VIDYA MANDIR HIGH SCHOOL & JUNIOR COLLEGE**  
**II Terminal Examination 2016-17**

**Subject : English**

Name : \_\_\_\_\_ Std: II Div : \_\_\_\_\_ Roll No. \_\_\_\_\_ MARKS: 60  
DATE - 31.01.2017 Time : 2 hrs 45 mins

**QIA] Fill in the blanks by choosing the correct words from the bracket.(4)**

[curl, red balloon, factories, villagers]

1. Ashwin saw a \_\_\_\_\_ floating high in the sky.
2. Cats, dogs and foxes \_\_\_\_\_ up to go to sleep.
3. The chocolate that you get in shops are made in big  
chocolate\_\_\_\_\_.
4. Some\_\_\_\_\_ were working in the fields nearby.

**B] Write whether the following statements are True or False: (5)**

1. Early in the morning you feel fresh. \_\_\_\_\_
2. In the middle of the ground there was a pot. \_\_\_\_\_
3. Cocoa tree grows in the cold region. \_\_\_\_\_
4. One day a hungry lion really came up to eat up a sheep. \_\_\_\_\_
5. The mother of the five little chickens was in the green garden  
patch. \_\_\_\_\_

**C] Match the column : (4)**

- A**
1. spotted
  2. nap
  3. soaked
  4. tree

- B**
- a) prettiest
  - b) made wet
  - c) a short sleep
  - d) saw

1. \_\_\_\_\_ 2. \_\_\_\_\_ 3. \_\_\_\_\_ 4. \_\_\_\_\_

**QII. A] Complete the lines of the poem : (2)**

- 1) Good morning , merry sunshine ,  
\_\_\_\_\_
- 2) Leave your supper  
\_\_\_\_\_

**B] Who said to whom :**

**(4)**

1. " We need only one judge who will give a good judgement. "

\_\_\_\_\_

2. "But I don't want to move."

\_\_\_\_\_

**C] Frame sentences :**

**(4)**

1. caught – \_\_\_\_\_

\_\_\_\_\_

2. attention – \_\_\_\_\_

\_\_\_\_\_

**QIII A] Complete the following lines :**

**(2)**

1) The cart had a \_\_\_\_\_.

2) The birds began to screech and \_\_\_\_\_

**B] Answer the following questions:**

**(8)**

1. How did the cart come out ?

Ans: \_\_\_\_\_

\_\_\_\_\_

2. How did the birds fight ?

Ans: \_\_\_\_\_

\_\_\_\_\_

3. Why did Bheem shout at the old monkey?

Ans: \_\_\_\_\_

\_\_\_\_\_

4. Why did the shepherd boy decide to have fun?

Ans: \_\_\_\_\_

\_\_\_\_\_

---

**C] Do as directed :**

**(7)**

1. bug - \_\_\_\_\_ [ rhyming word ]
2. pods- \_\_\_\_\_ [singular form ]
3. leopard- \_\_\_\_\_[female/feminine form]
4. Tick the correct meaning of the word **grief** -  
a) great sadness  b) great happiness
5. over x \_\_\_\_\_ [ opposite ]
6. A monkey lay \_\_\_\_\_ the path .( over / across )
7. Rearrange the letters of the given word to make a meaningful word.  
**rudona** - \_\_\_\_\_

**GRAMMAR**

**QI. Do as directed.**

**(15)**

1. Choose the correct describing word from the bracket and fill in the blank.  
Akbar was a \_\_\_\_\_ king . (great / red )
2. \_\_\_\_\_ butter is left? [How much /How many ]
3. \_\_\_\_\_ are keys .[ These / Those ]
4. \_\_\_\_\_ is a cloud.[This/ That ]
5. The lion lives in a \_\_\_\_\_.[den / stable ]
6. \_\_\_\_\_ old are you? [How / Why]
7. cruel x \_\_\_\_\_[ opposite ]
8. We \_\_\_\_\_ so happy that we started jumping.[ were/was ]
9. Rajni is my friend. She \_\_\_\_\_ good at studies.[ is , am or are ]
10. My mother \_\_\_\_\_very tasty cakes.[bakes /throws]





## All The Best

---